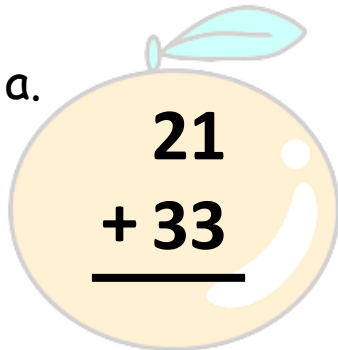


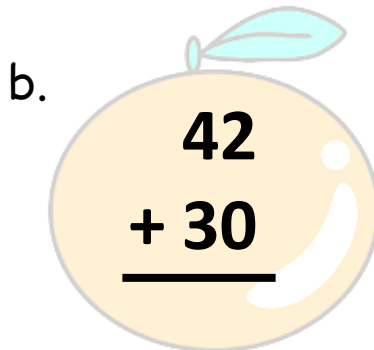
Name: _____

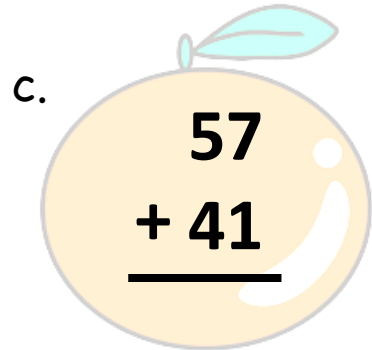
Score: _____

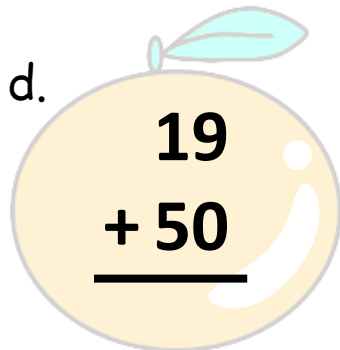
Addition

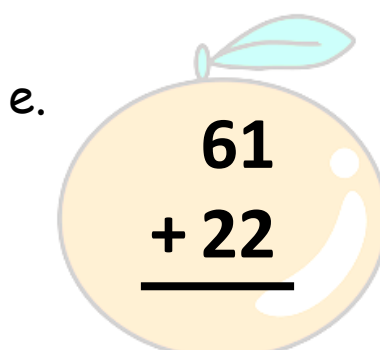
Directions: Find the sum. Write your answer on the box.

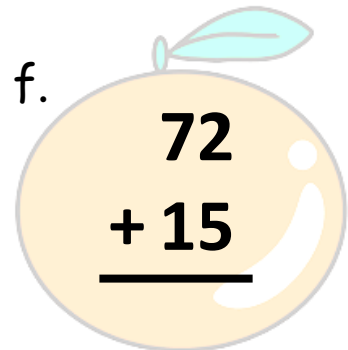
a. 
$$\begin{array}{r} 21 \\ + 33 \\ \hline \end{array}$$

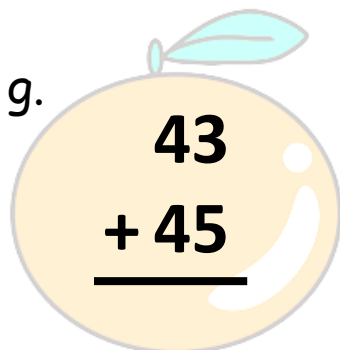
b. 
$$\begin{array}{r} 42 \\ + 30 \\ \hline \end{array}$$

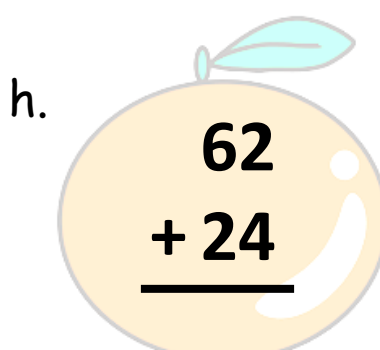
c. 
$$\begin{array}{r} 57 \\ + 41 \\ \hline \end{array}$$

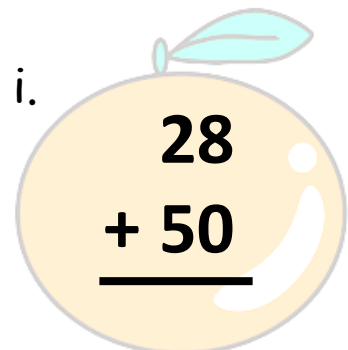
d. 
$$\begin{array}{r} 19 \\ + 50 \\ \hline \end{array}$$

e. 
$$\begin{array}{r} 61 \\ + 22 \\ \hline \end{array}$$

f. 
$$\begin{array}{r} 72 \\ + 15 \\ \hline \end{array}$$

g. 
$$\begin{array}{r} 43 \\ + 45 \\ \hline \end{array}$$

h. 
$$\begin{array}{r} 62 \\ + 24 \\ \hline \end{array}$$

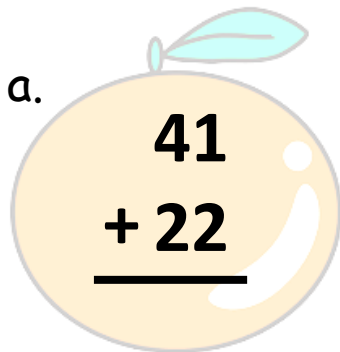
i. 
$$\begin{array}{r} 28 \\ + 50 \\ \hline \end{array}$$

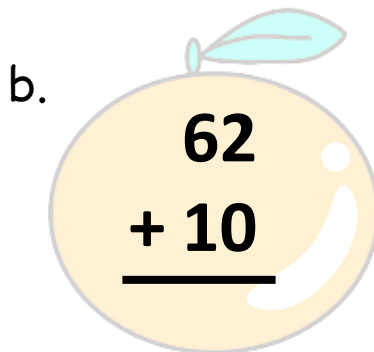
Name: _____

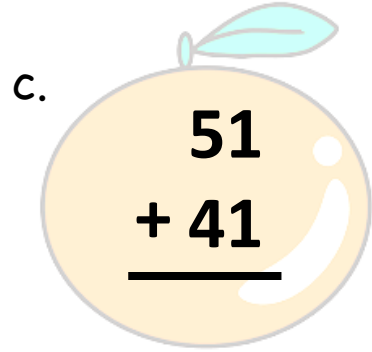
Score: _____

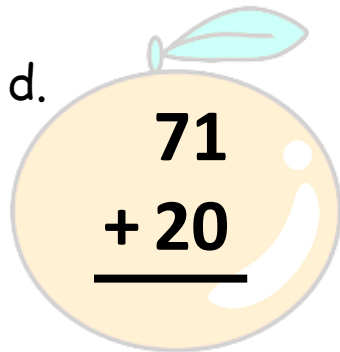
Addition

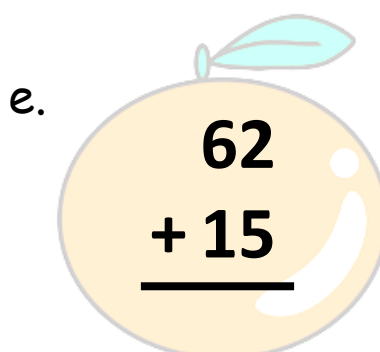
Directions: Find the sum. Write your answer on the box.

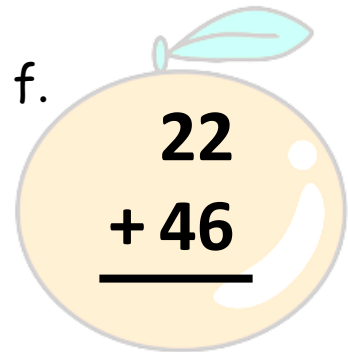
a. 
$$\begin{array}{r} 41 \\ + 22 \\ \hline \end{array}$$

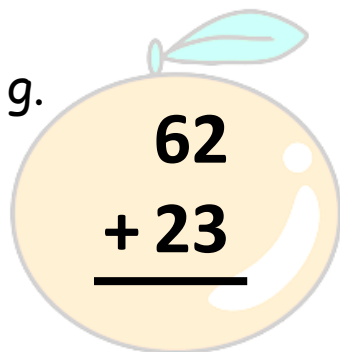
b. 
$$\begin{array}{r} 62 \\ + 10 \\ \hline \end{array}$$

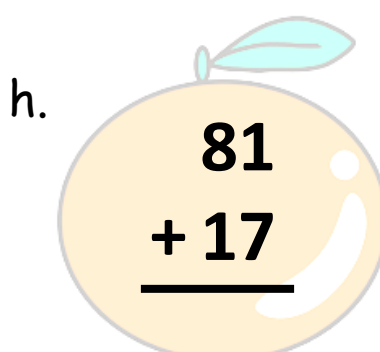
c. 
$$\begin{array}{r} 51 \\ + 41 \\ \hline \end{array}$$

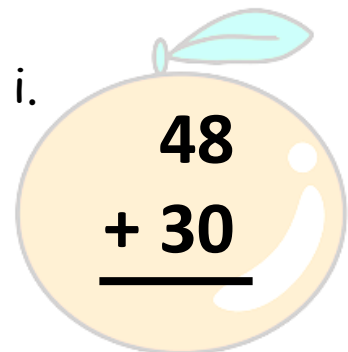
d. 
$$\begin{array}{r} 71 \\ + 20 \\ \hline \end{array}$$

e. 
$$\begin{array}{r} 62 \\ + 15 \\ \hline \end{array}$$

f. 
$$\begin{array}{r} 22 \\ + 46 \\ \hline \end{array}$$

g. 
$$\begin{array}{r} 62 \\ + 23 \\ \hline \end{array}$$

h. 
$$\begin{array}{r} 81 \\ + 17 \\ \hline \end{array}$$

i. 
$$\begin{array}{r} 48 \\ + 30 \\ \hline \end{array}$$