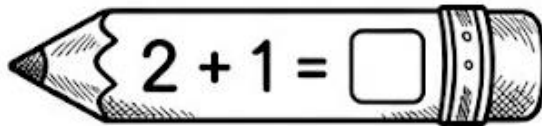


Name: _____

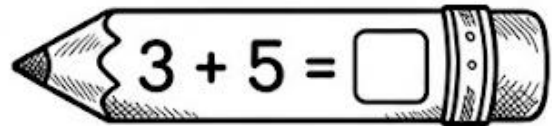
Ms. Oli

Addition

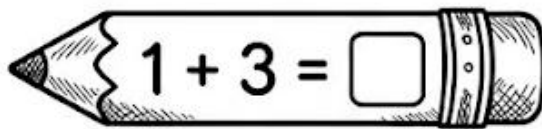
Directions: Find the sum of the following numbers. Write your answer in the box.



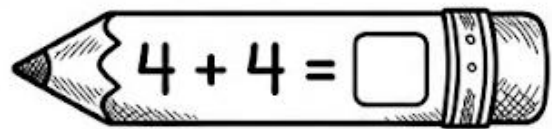
$2 + 1 = \square$



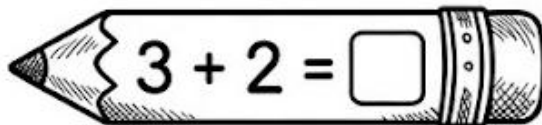
$3 + 5 = \square$



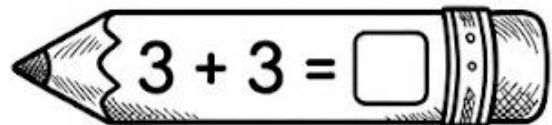
$1 + 3 = \square$



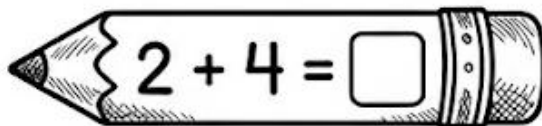
$4 + 4 = \square$



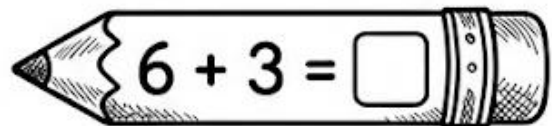
$3 + 2 = \square$



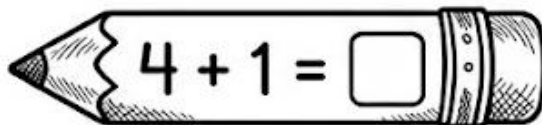
$3 + 3 = \square$



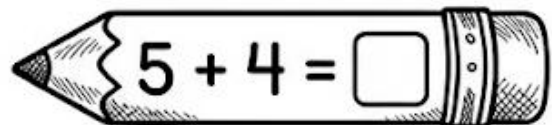
$2 + 4 = \square$



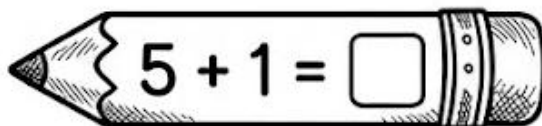
$6 + 3 = \square$



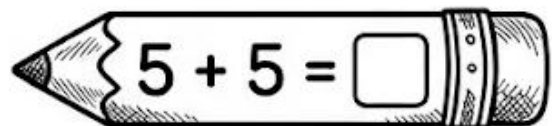
$4 + 1 = \square$



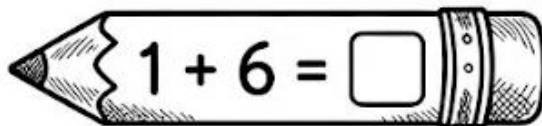
$5 + 4 = \square$



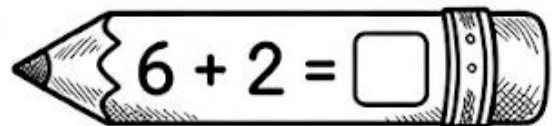
$5 + 1 = \square$



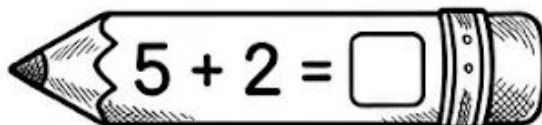
$5 + 5 = \square$



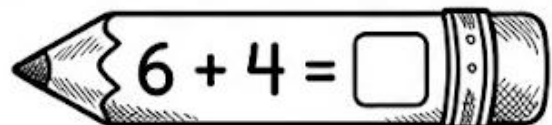
$1 + 6 = \square$



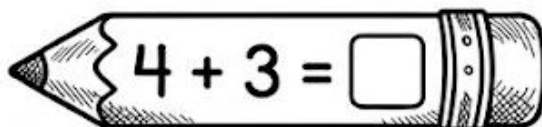
$6 + 2 = \square$



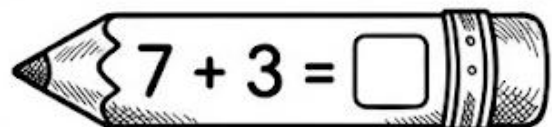
$5 + 2 = \square$



$6 + 4 = \square$



$4 + 3 = \square$



$7 + 3 = \square$